


Name _____

Date _____

The Clock — Quarter to the hour.

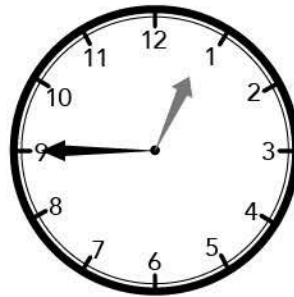
Draw lines to connect the different ways of telling the time.

Quarter to 1



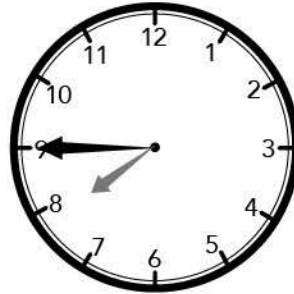
6:45

Quarter to 7



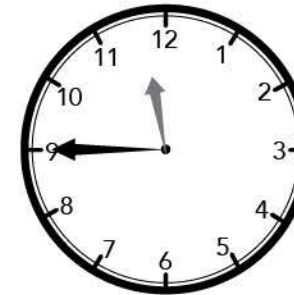
7:45

Quarter to 11



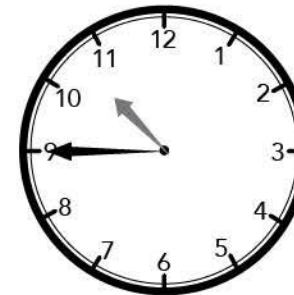
12:45

Quarter to 8



10:45

Quarter to 12



11:45